

GOLD EDITION

PRACTICE COACH PLUS



Mathematics

4



triumphlearning™

Coach®

Practice Coach™ PLUS

Contents

Domain 1	Number and Operations in Base Ten	1
Lesson 1	Read and Write Whole Numbers	2
Lesson 2	Compare and Order Whole Numbers	14
Lesson 3	Multiplication Facts	26
Lesson 4	Multiply Greater Numbers	38
Lesson 5	Multiplication Properties	50
Lesson 6	Distributive Property of Multiplication	62
Lesson 7	Division Facts	74
Lesson 8	Divide Greater Numbers	86
Lesson 9	Division with Remainders	98
Lesson 10	Multiply and Divide by Multiples of 10, 100, and 1,000	110
Domain 2	Operations and Algebraic Thinking	123
Lesson 11	Factors and Multiples	124
Lesson 12	Add Whole Numbers	136
Lesson 13	Subtract Whole Numbers	148
Lesson 14	Round Whole Numbers	160
Lesson 15	Estimate Sums and Differences	172
Lesson 16	Estimate Products and Quotients	184
Lesson 17	Patterns	196
Domain 3	Number and Operations—Fractions	209
Lesson 18	Equivalent Fractions	210
Lesson 19	Mixed Numbers and Improper Fractions	222
Lesson 20	Compare Fractions	234
Lesson 21	Add Fractions	246
Lesson 22	Subtract Fractions	258
Lesson 23	Add and Subtract Mixed Numbers	270
Lesson 24	Multiply Fractions with Whole Numbers	282
Lesson 25	Decimals	294

Lesson 26	Relate Decimals to Fractions	306
Lesson 27	Compare and Order Decimals.	318
Domain 4	Measurement and Data	331
Lesson 28	Money	332
Lesson 29	Time	344
Lesson 30	Weight and Mass.	356
Lesson 31	Capacity	368
Lesson 32	Length.	380
Lesson 33	Perimeter	392
Lesson 34	Area.	404
Lesson 35	Angles.	416
Lesson 36	Line Plots	428
Domain 5	Geometry	441
Lesson 37	Lines and Angles.	442
Lesson 38	Two-Dimensional Shapes	454
Lesson 39	Symmetry	466
Key Terms and Definitions	478
Diagnostic Assessments	A1

Distributive Property of Multiplication



Coached Instruction

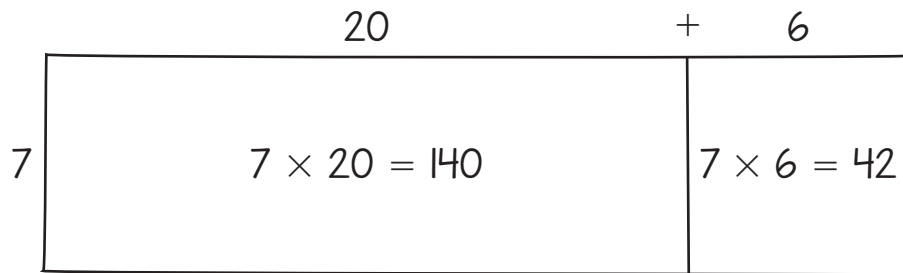
- Compare Riley's and Samantha's methods for solving the problem below.

Multiply.

$$7 \times 26$$

RILEY'S METHOD

I drew a model to help me solve.



I added the partial products: $140 + 42 = 182$.

So, $7 \times 26 = 182$.

SAMANTHA'S METHOD

I rewrote 26 in expanded form. I used partial products to solve.

$$\begin{array}{r}
 26 \leftarrow (20 + 6) \\
 \times \quad 7 \\
 \hline
 42 \leftarrow 7 \times 6 \\
 + 140 \leftarrow 7 \times 20 \\
 \hline
 182
 \end{array}$$

So, $7 \times 26 = 182$.

DISCUSS

Are the products in Riley's area model the same as the partial products in Samantha's method?

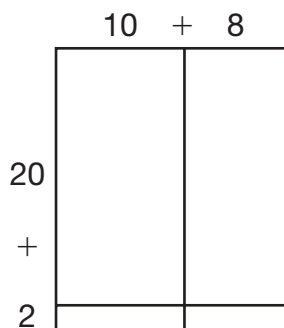
What does that tell you about the two methods used to solve the problem?

**APPLY**

Multiply 3×135 . Draw a model or write a multiplication sentence. Show your work.

► **Understand Quinn's method for solving the problem below.**

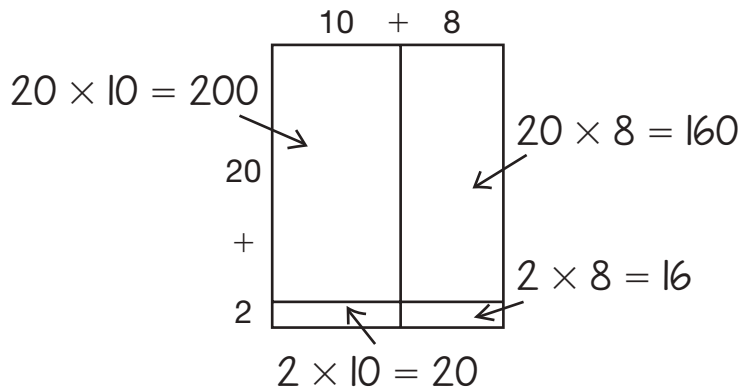
Students from 22 states will participate in a math competition. There will be 18 students chosen from each state. How many students in all will be chosen for the math competition? Use the area model to help you solve.



- A.** 216 **B.** 240 **C.** 360 **D.** 396

QUINN'S METHOD

I used the model to find each partial product.



I added the partial products.

$$200 + 160 + 20 + 16 = 396 \text{ students}$$

Choice D is correct.

DISCUSS

Could you multiply 18×22 by decomposing the factor 22 into $(10 + 12)$?

How do the partial products differ from Quinn's method?



APPLY

Pat rewrote 23×19 below.

$$23 \times 19 = (20 + 3) \times (10 + 9)$$

Which is **not** one of the partial products?

- A. 209
- B. 180
- C. 30
- D. 27

Show how you know with a picture or calculations.



ERROR ANALYSIS

- **Miranda corrected Darryl's mistake in the problem below. Analyze their work.**

Use the distributive property to find the product of 16×27 .

DARRYL'S METHOD

I decomposed 16 and 27 into tens and ones.

There is 1 ten in 16 and 2 tens in 27.

There are 6 ones in 16 and 7 ones in 27.

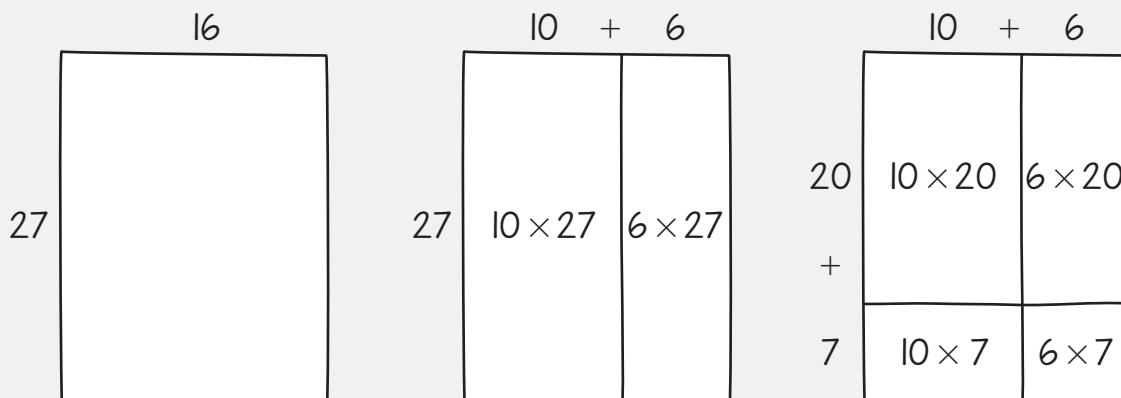
$$16 \times 27 = (10 \times 20) + (6 \times 7) = 200 + 42 = 242$$

The product is 242.

Miranda realizes that Darryl made a mistake.

MIRANDA'S CORRECTION

I drew area models to show 16×27 .



Then I found each partial product.

$$(10 \times 20) + (6 \times 20) + (10 \times 7) + (6 \times 7) = 200 + 120 + 70 + 42 = 432$$

The product is 432.

DISCUSS

What was Darryl's mistake?

How did Miranda's model help her avoid making that mistake?



APPLY

Which does **not** show the correct use of the distributive property to multiply 12×43 ?

- A. $(10 \times 43) + (2 \times 43)$
- B. $(12 \times 40) + (12 \times 3)$
- C. $(10 \times 40) + (2 \times 40) + (10 \times 3) + (2 \times 3)$
- D. $(10 \times 40) + (2 \times 3)$

Show your work and explain your answer.

Lesson Practice | Part 1

Choose the correct answer.

1. Which is true?

- A. $3 \times 78 = (3 \times 70) \times (3 \times 8)$
- B. $3 \times 78 = (3 \times 70) + (3 \times 8)$
- C. $3 \times 78 = (3 + 70) \times (3 + 8)$
- D. $3 \times 78 = (3 + 70) + (3 + 8)$

2. Which is true?

- A. $64 \times 14 = (64 \times 10) \times (64 \times 4)$
- B. $64 \times 14 = (64 \times 10) + (64 \times 4)$
- C. $64 \times 14 = (64 + 10) \times (64 + 4)$
- D. $64 \times 14 = (64 + 10) + (64 + 4)$

3. Which is true?

- A. $52 \times 23 = (52 \times 20) + (52 \times 3)$
- B. $52 \times 23 = (50 \times 20) + (2 \times 3)$
- C. $52 \times 23 = (52 \times 20) + (2 \times 3)$
- D. $52 \times 23 = (52 \times 20) \times (52 \times 3)$

4. Multiply.

$$16 \times 24 = \square$$

- A. 96
- B. 324
- C. 326
- D. 384

5. Multiply.

$$23 \times 23 = \square$$

- A. 115
- B. 246
- C. 529
- D. 1,024

6. A club charges \$26 for a one-year membership. The club has 62 members. How much does the club collect in membership fees each year?

- A. \$208
- B. \$1,560
- C. \$1,612
- D. \$2,408

7. Rosa bought 15 cases of water for a school fair. Each case has 24 bottles. How many bottles of water did Rosa buy?

- A. 200
- B. 260
- C. 300
- D. 360

8. A manatee's heart normally beats about 55 times a minute. How many times does a manatee's heart beat in 60 minutes?

- A. 33,000
- B. 3,300
- C. 3,000
- D. 330

9. The art teacher bought 32 boxes of crayons. Each box has 64 crayons.

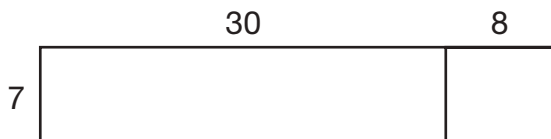
A. Write a number sentence to find how many crayons the art teacher bought in all.

B. Use the distributive property of multiplication to find the total number of crayons. Show your work.

Lesson Practice | Part 2

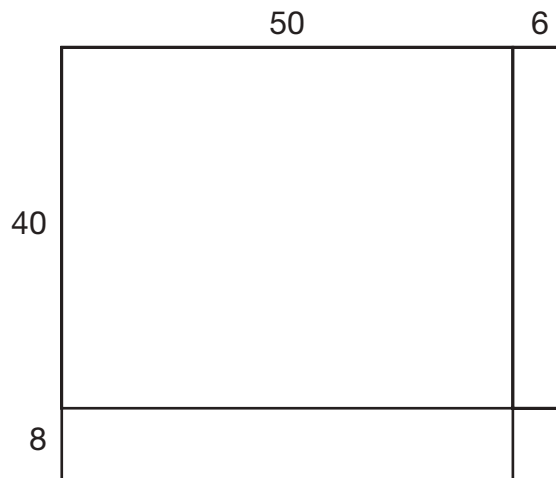
Choose the correct answer.

1. Use the area model to find the product.



- A. 216
 B. 256
 C. 266
 D. 276
2. Which number makes this sentence true?
 $54 \times 9 = (50 \times 9) + (\square \times 9)$
- A. 4
 B. 9
 C. 50
 D. 54
3. Which correctly shows the distributive property?
- A. $42 \times 26 = (40 \times 20) + (2 \times 6)$
 B. $42 \times 26 = (42 \times 20) + (42 \times 6)$
 C. $42 \times 26 = (40 \times 20) + (42 \times 6)$
 D. $42 \times 26 = (40 \times 26) + (42 \times 26)$

4. Use the area model to find the product.



- A. 2,688
 B. 2,648
 C. 2,488
 D. 2,448
5. Tracy is using an area model to multiply 72×63 . Which is not one of the correct partial products that she will find by using the area model?
- A. 6
 B. 120
 C. 240
 D. 4,200

6. Which explains one way to find the product of 38×27 ?

- A. Multiply 38×20 , multiply 38×7 , and multiply the products.
- B. Multiply 30×20 , multiply 8×7 , and add the products.
- C. Multiply 30×20 , multiply 8×7 , and multiply the products.
- D. Multiply 38×20 , multiply 38×7 , and add the products.

7. Which number makes this sentence true?

$$77 \times 86 = (70 \times 86) + (\square \times 86)$$

- A. 7
- B. 70
- C. 74
- D. 86

8. Jimmy is going to multiply 52×34 . Which is **not** a way that he can use the distributive property to find the product?

- A. $52 \times 34 = (50 \times 34) + (2 \times 34)$
- B. $52 \times 34 = (52 \times 30) + (52 \times 4)$
- C. $52 \times 34 = (50 \times 30) + (50 \times 4) + (2 \times 30) + (2 \times 4)$
- D. $52 \times 34 = (52 \times 30) + (2 \times 34)$

9. There are 28 rows of seats on the bottom floor of an auditorium. Each row on the bottom floor contains 46 seats. There are 16 rows of seats on the top floor. Each row on the top floor contains 32 seats.

A. How many seats are on the first floor? Show your work.

B. How many seats are on the second floor? Show your work.

10. Multiply 6×53 . Write the method you chose and show your work.

11. A crate of pasta contains 42 boxes. Each box is 12 ounces. Write the partial products to find the number of ounces of pasta in the crate. Use area models.

12. Melody incorrectly used the distributive property to set up the multiplication problem below.

$$21 \times 45 = (20 \times 40) + (1 \times 5) = 800 + 5 = 805$$

What is Melody's error? Explain your answer.

What is the product of 21×45 ? Draw a model to show the partial products.