

Teacher's Manual

Instruction CoachTM Mathematics

Dear Educator,

Instruction Coach has been built to meet the new, higher standards for mathematics and contains the rigor that your students will need. We believe you will find it to be an excellent resource for comprehensive instruction, practice, and assessment.










The Triumph Learning Team

Instruction Coach, Mathematics, First Edition, Grade 5, Teacher's Manual 525NATE ISBN-13: 978-1-62928-399-9
Cover Image: © Thinkstock

Triumph Learning® 136 Madison Avenue, 7th Floor, New York, NY 10016 © 2013 Triumph Learning, LLC. All rights reserved. No part of this publication may be reproduced in whole or in part, stored in a retrieval system, or transmitted in any form or by any means, electronic, mechanical, photocopying, recording or otherwise, without written permission from the publisher.

Printed in the United States of America. 10 9 8 7 6 5 4 3 2 1

Contents

Instructional Overview	iv
Chapter 1 Operations and Algebraic Thinking	2
Lesson 1 Evaluating Numerical Expressions	4
Lesson 2 Writing and Interpreting Numerical Expressions	6
Lesson 3 Analyzing and Generating Numerical Patterns	8
Chapter 2 Number and Operations in Base Ten	10
Lesson 4 Multiplying and Dividing by Powers of Ten	12
Lesson 5 Using Place Value to Read and Write Decimals	14
Lesson 6 Comparing Decimals	16
Lesson 7  Rounding Decimals Using Place Value	18
Lesson 8   Multiplying Whole Numbers	20
Lesson 9  Dividing Whole Numbers	22
Lesson 10 Adding and Subtracting Decimals	24
Lesson 11 Multiplying Decimals	26
Lesson 12  Dividing Decimals	28
Chapter 3 Number and Operations—Fractions	30
Lesson 13 Adding and Subtracting Fractions and Mixed Numbers	32
Lesson 14  Problem Solving: Adding and Subtracting Fractions and Mixed Numbers	34
Lesson 15  Problem Solving: Interpreting Fractions as Division	36
Lesson 16 Multiplying Fractions	38
Lesson 17 Interpreting Multiplication of Fractions	40
Lesson 18  Problem Solving: Multiplying Fractions and Mixed Numbers	42
Lesson 19 Dividing with Unit Fractions and Whole Numbers	44
Lesson 20  Problem Solving: Dividing with Unit Fractions	46






Problem Solving



Fluency Lesson



Performance Task

Chapter 4 Measurement and Data	48
Lesson 21 Converting Units of Measure to Solve Problems	50
Lesson 22 Line Plots	52
Lesson 23 Understanding and Measuring Volume	54
Lesson 24  Finding Volume of Rectangular Prisms	56
Lesson 25  Recognizing Volume as Additive	58
Chapter 5 Geometry	60
Lesson 26 Graphing Points on the Coordinate Plane	62
Lesson 27  The Coordinate Plane	64
Lesson 28 Extending Classification of Two-Dimensional Figures	66
Answer Key	68
Math Tools	90
Appendix A: Fluency Practice	A
Appendix B: Correlations Charts	B

Instructional Overview

Welcome to *Instruction Coach*! This program is based on the philosophy that mathematical skills are built on concepts. Math, more than any other school subject, builds from concept to concept, one on top of another, over several years. When students understand concepts and how they connect to skills, they are better equipped to solve the problems that they encounter in the real world.

Implementation

Instruction Coach is your instructional anchor. You probably have other instructional materials in your class—they may be books and workbooks, computers, smart boards, pads, math manipulatives, or a basal textbook. You know when and how to apply the appropriate mix of instruction for your students as the content demands. In the end, these are your students, who are in your class and your school. You know your class best. You have the wisdom and knowledge to use *Instruction Coach* in the best way possible for your students.

Basal Implementation

Instruction Coach offers complete instruction for your grade. You can use it as your main instructional vehicle throughout the school year. *Instruction Coach* is a complete package—from instructional lessons to robust lesson practice to chapter reviews and performance tasks.

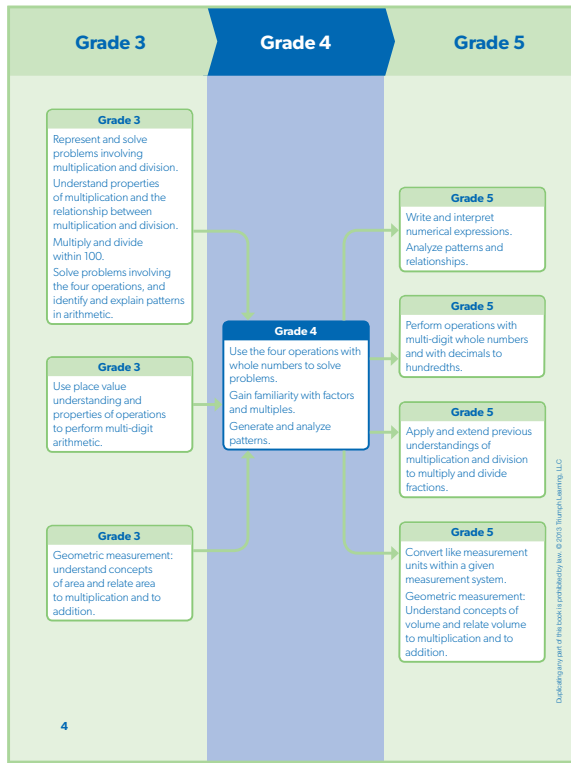
Supplemental Implementation

If you use a basal textbook, then *Instruction Coach* becomes an excellent partner in helping to strengthen and advance your mathematics instruction. *Instruction Coach* and your basal can work together hand in hand; whether for lesson review, lesson practice, chapter review, or working through a performance task, *Instruction Coach* is ready to help your students.

The flexibility of *Instruction Coach* allows it to fit into many stages of instruction. For example, you may want to use *Instruction Coach* on a twice-weekly basis to add depth, understanding, and practice to the basal experience. Alternatively, you may choose to use *Instruction Coach* at the end of a chapter of instruction if you judge that your students need additional practice in that concept and skill. You can then choose several or all lessons from the chapter to reinforce and review concepts and skills included in that chapter. Or, you may want to assign specific lessons from *Instruction Coach* to groups of students or to individuals.

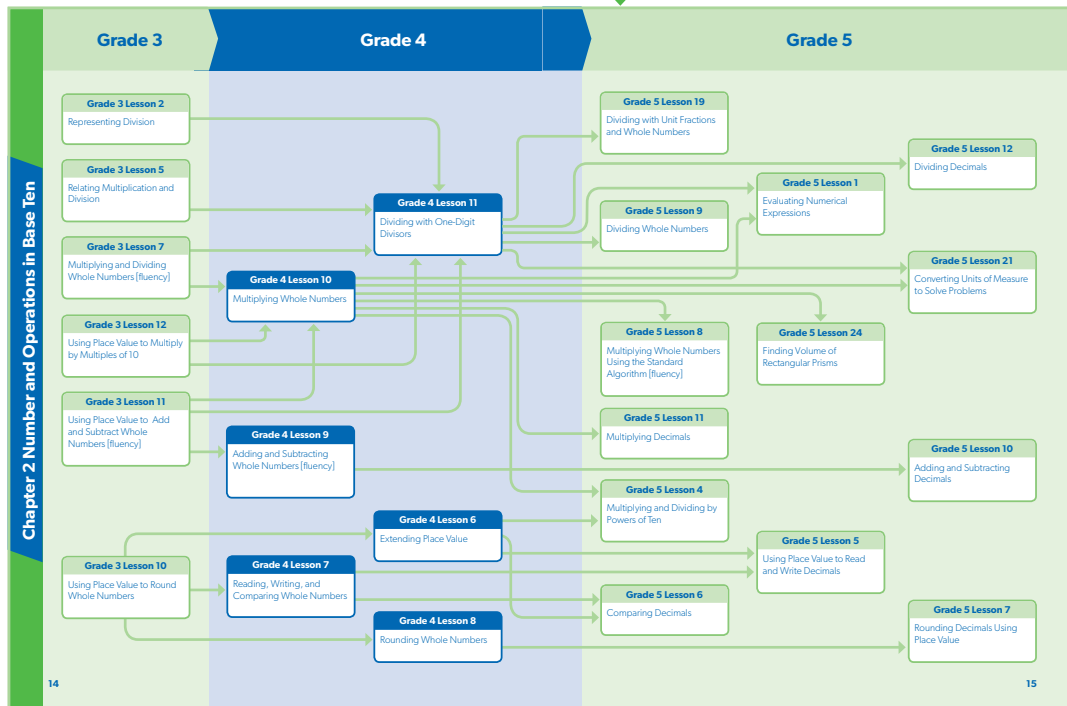
Progressions

The content covered in this program is organized by chapter. The content across grades 3–5 connects back to math taught earlier in kindergarten and grades 1 and 2. For grades 6–8, although most of the names change, the connections back to earlier grades are strong and dependent. *Instruction Coach* helps you make critical connections between topics within a single grade level and across grade levels.



Progressions in the Student Edition give students a clear visual roadmap of how new content builds upon content from previous grade levels and connects to future content.

Lesson Progressions in the Teacher’s Manual help you focus on key connections. Each Chapter opens with a Lesson Progression Map that offers a visual progression of lesson content across grades, including both pre- and post-requisite lessons for each chapter. Focusing instruction on these connections will help strengthen the continuum of mathematical concepts and skills.



Lessons

The lessons flow in a logical fashion, building on prior knowledge from the forerunner chapter or from a chapter whose content links to the chapter at hand. Lessons will often take several days to complete. Use the features—DISCUSS, TRY, CHECK, and MODEL—in the lessons to stimulate discussions, to allow groups of students to interact and answer questions, and to connect with other parts of the math curriculum. The lesson practice allows many options, from work in class to homework.

There are three types of lessons in this program:

Concept Lessons begin with an underlying concept that connects directly to the skill or skills taught in that lesson.

Skill Lessons start directly with a skill and work through many variants of its application. All skills are developed through Examples.

LESSON 7 Reading, Writing, and Comparing Whole Numbers

UNDERSTAND You use place value to write numbers. A place-value chart separates numbers into periods. Write the number name for 780,412.

1 Place 780,412 in a place-value chart.

Thousands			Ones		
Hundreds	Tens	Ones	Hundreds	Tens	Ones
7	8	0	4	1	2

2 Start with the thousands period.

Thousands			Ones		
Hundreds	Tens	Ones	Hundreds	Tens	Ones
7	8	0	4	1	2

Read the digits in the thousands period.
seven hundred eighty

Say the name of the period.
seven hundred eighty thousand

Place a comma after the name of the period.
seven hundred eighty thousand,

3 Continue with the ones period.

Thousands			Ones		
Hundreds	Tens	Ones	Hundreds	Tens	Ones
7	8	0	4	1	2

Read the digits in the ones period.
four hundred twelve

Write four hundred twelve after the comma.
The number name for 780,412 is seven hundred eighty thousand, four hundred twelve.

Connect

Write the number 780,412 in expanded form.

1 Use a place-value chart to find the value of each digit.

Thousands			Ones		
Hundreds	Tens	Ones	Hundreds	Tens	Ones
7	8	0	4	1	2

2 Write the number of units that correspond to each place value.

How many hundred thousands? 7
How many ten thousands? 8
How many thousands? 0
How many hundreds? 4
How many tens? 1
How many ones? 2

3 Write the value of each digit.

7 hundred thousands = 700,000
8 ten thousands = 80,000
0 thousands = 0
4 hundreds = 400
1 ten = 10
2 ones = 2

4 Write all the values you found, separating them with a plus sign.

Zeros are not shown in expanded form, so do not write a number for the thousands.

The expanded form for 780,412 is $700,000 + 80,000 + 400 + 10 + 2$.

DISCUSS Explain how to find the expanded form of a number.

LESSON 9 Adding and Subtracting Whole Numbers

EXAMPLE A Add. $35,748 + 17,026$

1 Set up the problem vertically. Line up the digits with the same place values.

$$\begin{array}{r} 35,748 \\ +17,026 \\ \hline \end{array}$$

2 Add the ones. Regroup 14 ones as 1 ten 4 ones.

$$\begin{array}{r} 1 \\ 35,748 \\ +17,026 \\ \hline 4 \end{array}$$

3 Add the tens.

$$\begin{array}{r} 1 \\ 35,748 \\ +17,026 \\ \hline 74 \end{array}$$

4 Add the hundreds.

$$\begin{array}{r} 1 \\ 35,748 \\ +17,026 \\ \hline 774 \end{array}$$

5 Add the thousands. Regroup. Add the ten thousands.

$$\begin{array}{r} 1 \quad 1 \\ 35,748 \\ +17,026 \\ \hline 52,774 \end{array}$$

$35,748 + 17,026 = 52,774$

DISCUSS Explain why you regrouped the ones and the thousands in this example.

EXAMPLE B Subtract. $64,783 - 29,525$

1 Set up the problem vertically. Line up the digits with the same place values.

$$\begin{array}{r} 64,783 \\ -29,525 \\ \hline \end{array}$$

2 You cannot subtract 5 ones from 3 ones. Regroup. Then subtract the ones.

$$\begin{array}{r} 713 \\ 64,7\cancel{8}3 \\ -29,525 \\ \hline 8 \end{array}$$

3 Subtract the tens.

$$\begin{array}{r} 713 \\ 64,7\cancel{8}3 \\ -29,525 \\ \hline 58 \end{array}$$

4 Subtract the hundreds.

$$\begin{array}{r} 713 \\ 64,7\cancel{8}3 \\ -29,525 \\ \hline 258 \end{array}$$

5 You cannot subtract 9 thousands from 4 thousands. Regroup. Subtract the thousands. Then, subtract the ten thousands.

$$\begin{array}{r} 514 \quad 713 \\ \cancel{6}4,7\cancel{8}3 \\ -29,525 \\ \hline 35,258 \end{array}$$

$64,783 - 29,525 = 35,258$

CHECK Use addition to check your answer.

$$\begin{array}{r} 35,258 \\ +29,525 \\ \hline \end{array}$$

Interactive Questions included at the end of most Examples ask students to DISCUSS a topic, MODEL a situation, TRY to solve a problem on their own, or CHECK their work.

Problem-Solving Lessons apply skills to real-world problem situations. Students will use a four-step problem-solving process to approach mathematical problems.

READ to understand the problem and what is being asked.

Make a PLAN. Identify the steps necessary to solve the problem.

Carry out the steps to SOLVE the problem.

CHECK that the answer is correct.

LESSON 3 Problem Solving: Multi-Step Problems

The Music Store

READ
A music store has 438 rock CDs and 82 country CDs for sale. Last week, the store sold 106 CDs. How many CDs are left in the store?

PLAN
Step 1: Write an equation to represent the number of CDs in all.
Let x = the total number of CDs
 $438 + 82 = x$
Step 2: Use the answer from Step 1 to write the equation to represent the number of CDs that are left in the store.
Let y = the number of CDs left
 $(\text{total number of CDs}) - 106 = y$

SOLVE
Step 1: **Add.**

$$\begin{array}{r} 438 \\ + 82 \\ \hline \end{array}$$
 ← addend
 ← addend
 ← sum
 Step 2: **Subtract.**

$$\begin{array}{r} 520 \\ - 106 \\ \hline \end{array}$$
 ← minuend
 ← subtrahend
 ← difference

CHECK
You can check the answer to a subtraction problem using addition.

$$\begin{array}{r} 414 \\ + 106 \\ \hline \end{array}$$

 The sum matches the minuend, so the answer is correct.
 The difference, y , is _____.
 → There are _____ CDs left in the store.

14 Chapter 1: Operations and Algebraic Thinking

Additional Features

Practice

For questions 1–3, will the first digit of the quotient be in the hundreds place, tens place, or ones place?

1. $2\overline{)428}$ 2. $5\overline{)275}$ 3. $3\overline{)285}$

Are there enough hundreds?

Fill in the numbers in the boxes to complete the division.

4. $\begin{array}{r} \square \square 5 \\ 4\overline{)620} \\ \underline{-4} \\ \square 2 \\ \underline{-20} \\ \square 0 \\ \underline{-} \\ 0 \end{array}$ 5. $\begin{array}{r} \square 2 \square \square \\ 6\overline{)7242} \\ \underline{-} \\ \square 2 \\ \underline{-} \\ \square 4 2 \\ \underline{-} \\ 0 \end{array}$ 6. $\begin{array}{r} \square \square \square R \square \\ 7\overline{)3278} \\ \underline{-} \\ \square \square \square \\ \underline{-} \\ \square \square \square \\ \underline{-} \\ \square \square \square \end{array}$

REMEMBER Divide, multiply, and subtract in each step.

Divide. Check your answers.

7. $3\overline{)738}$ 8. $8\overline{)992}$ 9. $5\overline{)895}$

10. $3\overline{)273}$ 11. $5\overline{)854}$ 12. $4\overline{)202}$

78 Chapter 2: Number and Operations in Base Ten

Practice appears in each lesson. Each lesson concludes with two pages of practice. The practice items build in difficulty and offer a variety of question types. **Hint** and **Remember** features are included when appropriate.


Chapter Reviews consist of three pages of questions that cover all concepts and skills taught in the chapter. Chapter reviews include multiple-choice questions, short-response questions, and extended-response questions. These reviews serve as excellent practice tests for the chapter assessments.

APPLES, ORANGES, AND MELONS

Debbie bought some apples, some oranges, and some melons. She put all of the apples in one bag, all of the oranges in another bag, and all of the melons in a third bag. The weights of all three bags are the same.

Each apple weighs 4 ounces.
Each orange weighs 3 more ounces than an apple.
Each melon weighs twice as much as an orange.

How many apples, oranges, and melons did Debbie buy?
How much does each filled bag weigh?




_____ apples _____ oranges _____ melons
 _____ ounces _____ ounces _____ ounces


Copyright © 2013 by Pearson Education, Inc. Chapter 1 Review 37


Fluency Practice appears at the end of the Teacher's Manual. Each Teacher's Manual of *Instruction Coach* includes practice pages specifically designed to align to fluencies. Instructions on when and how to administer the fluency practice pages are included in the lesson plans within this manual. See Appendix A.

Chapter 1 Review

Use the arrays to write the factor pairs.

1. 15


2. 19


3. 6


Fill in the missing numbers in each pattern.

4. The rule is -10 .
 100, _____

5. The rule is $+5$.
 1, _____

6. The rule is $+2$.
 202, _____

Copyright © 2013 by Pearson Education, Inc.

Performance Tasks appear at the end of each Chapter. They complement instruction with non-routine application of chapter skills. Performance tasks require students to perform a range of activities, from drawing and building to writing; in a few cases, a task may even take students several days to complete and often asks students to work together to arrive at solutions.

Name _____ Date _____

Multiplication: Factors to 9

1. $\begin{array}{r} 2 \\ \times 7 \\ \hline \end{array}$ 2. $\begin{array}{r} 9 \\ \times 6 \\ \hline \end{array}$ 3. $\begin{array}{r} 8 \\ \times 1 \\ \hline \end{array}$ 4. $\begin{array}{r} 6 \\ \times 5 \\ \hline \end{array}$ 5. $\begin{array}{r} 5 \\ \times 5 \\ \hline \end{array}$ 6. $\begin{array}{r} 4 \\ \times 6 \\ \hline \end{array}$
 7. $\begin{array}{r} 5 \\ \times 8 \\ \hline \end{array}$ 8. $\begin{array}{r} 7 \\ \times 4 \\ \hline \end{array}$ 9. $\begin{array}{r} 9 \\ \times 3 \\ \hline \end{array}$ 10. $\begin{array}{r} 8 \\ \times 8 \\ \hline \end{array}$ 11. $\begin{array}{r} 7 \\ \times 6 \\ \hline \end{array}$ 12. $\begin{array}{r} 6 \\ \times 8 \\ \hline \end{array}$
 13. $\begin{array}{r} 5 \\ \times 4 \\ \hline \end{array}$ 14. $\begin{array}{r} 4 \\ \times 9 \\ \hline \end{array}$ 15. $\begin{array}{r} 9 \\ \times 9 \\ \hline \end{array}$ 16. $\begin{array}{r} 6 \\ \times 3 \\ \hline \end{array}$ 17. $\begin{array}{r} 2 \\ \times 9 \\ \hline \end{array}$ 18. $\begin{array}{r} 0 \\ \times 9 \\ \hline \end{array}$
 19. $\begin{array}{r} 8 \\ \times 4 \\ \hline \end{array}$ 20. $\begin{array}{r} 1 \\ \times 7 \\ \hline \end{array}$ 21. $\begin{array}{r} 9 \\ \times 5 \\ \hline \end{array}$ 22. $\begin{array}{r} 7 \\ \times 3 \\ \hline \end{array}$ 23. $\begin{array}{r} 7 \\ \times 9 \\ \hline \end{array}$ 24. $\begin{array}{r} 3 \\ \times 3 \\ \hline \end{array}$

25. $9 \times 8 = \underline{\quad}$ 26. $8 \times 7 = \underline{\quad}$ 27. $6 \times 6 = \underline{\quad}$
 28. $5 \times 7 = \underline{\quad}$ 29. $0 \times 6 = \underline{\quad}$ 30. $9 \times 1 = \underline{\quad}$
 31. $3 \times 8 = \underline{\quad}$ 32. $9 \times 9 = \underline{\quad}$ 33. $7 \times 7 = \underline{\quad}$
 34. $8 \times 5 = \underline{\quad}$ 35. $1 \times 6 = \underline{\quad}$ 36. $4 \times 7 = \underline{\quad}$
 37. $9 \times 7 = \underline{\quad}$ 38. $8 \times 6 = \underline{\quad}$ 39. $4 \times 4 = \underline{\quad}$

Copyright © 2013 by Pearson Education, Inc.

The *Instruction Coach* Student Edition also includes a glossary and a selection of content-specific math tools.

Glossary

acute angle an angle that has a measure of less than 90° Lesson 32

acute triangle a triangle with three acute angles Lesson 33

add (addition) to find the total when two or more groups are joined Lesson 3

addend a number to be added Lesson 3

angle a figure that is formed when two rays meet at one point called a vertex Lessons 29, 32

area the number of squares having a side length of 1 unit that can completely cover the inside of a plane figure with no gaps or overlaps Lesson 27

array an arrangement of objects in equal rows and columns Lesson 4

centimeter (cm) a metric unit for measuring length; 100 centimeters = 1 meter Lesson 24

circle a two-dimensional shape with a curved side containing 360 one-degree angles Lesson 29

circle graph a graph that uses a circle divided into pie-shaped sections to show parts of a whole Lesson 29

composite number a whole number that has more than one factor pair Lesson 4

cup (c) a customary unit for measuring capacity; 2 cups = 1 pint Lesson 23

customary system of measurement the system of units of measure used in the United States Lesson 23

decimal a number with one or more digits to the right of the decimal point Lesson 21

decimal point a period separating the ones from the tenths in a decimal Lesson 21

degree ($^\circ$) a unit for measuring angles Lesson 29

denominator the bottom number in a fraction, which tells how many equal parts in the whole or group Lesson 12

difference the answer in a subtraction problem Lesson 3

digit any of the numerals 0, 1, 2, 3, 4, 5, 6, 7, 8, and 9 Lesson 6

dividend the number to be divided Lesson 2

division (divide) to find the number of equal groups or the number in each group Lesson 2

divisor the number by which the dividend is divided Lesson 2

endpoint either of two points meeting the end of a line segment Lesson 29

equation a number sentence with an equal sign Lesson 1

equivalent fractions two or more fractions that name the same value but have different numerators and denominators Lesson 12

even number a number that is divisible by 2. Even numbers have 0, 2, 4, 6, or 8 in the ones place. Lesson 5

Copyright © Pearson Education, Inc., or its affiliate(s). All rights reserved.

230

Math Tool: Labeled Fraction Strips

The image shows a collection of fraction strips used as a math tool. The strips are arranged in rows, each representing a different fraction. The top row is a single strip labeled '1'. The second row has two strips labeled $\frac{1}{2}$. The third row has three strips labeled $\frac{1}{3}$. The fourth row has four strips labeled $\frac{1}{4}$. The fifth row has five strips labeled $\frac{1}{5}$. The sixth row has six strips labeled $\frac{1}{6}$. The seventh row has eight strips labeled $\frac{1}{8}$. The eighth row has ten strips labeled $\frac{1}{10}$. The ninth row has twelve strips labeled $\frac{1}{12}$. Each strip is a horizontal rectangle divided into equal parts, with the fraction label above it.

237

When students encounter a highlighted term in their book, they will find this term defined in the glossary. When math tools are necessary for a given lesson, you will find this reference in the Materials section of your lesson plan—occasionally, these tools are referenced in the lesson itself.

Assessments

A combination of great teaching, strong instructional content, and computer activities provides an excellent environment in which your students can achieve success. The assessments that accompany *Instruction Coach* will provide you with data to determine the depth of student understanding. Items on these assessments have been specifically crafted to assess content and skills. Given this information, you can decide how to use *Instruction Coach* with any number of additional resources to teach all your students in the best possible way.

The *Instruction Coach Assessments* include six comprehensive assessments. Additionally, each item in these assessments has been designed at a specific Webb’s Depth of Knowledge Level. The items always range from level 1 through level 3. These assessments are available in a separate booklet and in a digital format. Two types of assessments are included in the program:

Chapter Assessments

There are five Chapter Assessments, one for each Chapter. Each assessment consists of 20, 25, or 30 items. Students are given the opportunity to demonstrate mathematical proficiency in five open-ended items included at the end of each assessment. Rubrics and sample student work that assist in evaluating student work are also provided in a separate answer key.

Summative Assessment

At the end of the course, you can administer the summative assessment, designed to assess students’ understanding of the mathematical concepts at their grade level. It includes 50 multiple-choice items that range in difficulty.

Teacher's Manual

Lesson Plans

Two pages with guidance are provided for each student lesson.

Clear Learning Objectives for every lesson

Math Vocabulary with definitions

Pre-lesson activities introduce new concepts and skills or focus on prerequisite skills

Full support in working through instruction

LESSON
4

Understanding Factors and Multiples

Learning Objectives

- Students will understand how to find all factor pairs of a given number.
- Students will list multiples of a given number and determine if a given number is prime or composite.

Vocabulary	
array	an arrangement of objects in equal rows and columns
composite number	a whole number that has more than one factor pair
factor	a number that is multiplied to get a product
multiple	the product of a number and another number
prime number	a whole number that has exactly one factor pair, 1 and itself

Materials

- Math Tool: Multiplication Table
- Fluency Practice, page A2

Before the Lesson

Distribute copies of *Math Tool: Multiplication Table* or have the students use the Multiplication Table on

page 241 in their books. Discuss the relationship between factor pairs and basic multiplication facts. Ask: *What are all of the multiplication facts that have a product of 18?*

⚡ You might want to use Fluency Practice page A2 to help students review multiplication facts.

Understand ↔ Connect

This page introduces the term *factor*. Visual representations of factor pairs can provide insight for students when finding all of the factor pairs of a given number. Area models are particularly useful because they show the shape for each factor pair. To help develop conceptual understanding, begin by noting that the first area model is in the shape of a rectangle with 1 row, and that there are 24 squares in that row. Then note that the second model is also in the shape of a rectangle, but has 2 rows with 12 squares in each row. Emphasize that this rectangle also has a total of 24 squares but it is shorter than the rectangle with 1 row because the 24 squares are broken equally into 2 rows. Point out that the third area model shows

a rectangle made of 3 rows with 8 squares in each row, and that this rectangle is shorter and wider than the first two rectangles. When discussing the last area model, explain that this rectangle is the shortest and widest because the 24 squares are divided equally into 4 rows, so there are fewer squares in each row. Emphasize that each model shows 24 squares, but they are arranged differently each time.

To connect the concept to the procedural understanding, explain the steps for finding all of the factor pairs of a given number by using a multiplication table. Explain that this is another way to find factor pairs without the use of models. Emphasize that students can list all the basic

Duplicating any part of the book is prohibited by law.

Answers to Interactive Questions

multiplication facts with a product of 24 to help them find the factor pairs. Point out that the multiplication table only shows factors up to 12, so that they cannot find the factor pair of 1×24 on the table.

DISCUSS Discuss with students how to use a multiplication table to find the factor pairs of 12. Encourage students to use the terms *factor* and

product in their explanations. Ask: *How can you use a visual representation to help you determine if there are other factor pairs of 12 besides those you found using the multiplication table?*

Answers may vary. Possible answer: Find all the 12s in the table. Use the table to write the factor pairs: 1 and 12, 2 and 6, 3 and 4. The factors of 12 are 1, 2, 3, 4, 6, and 12.

Examples

EXAMPLE A This example introduces the term *multiple*. Emphasize that to determine the multiples of 5, students can use basic multiplication facts that have 5 as one factor and the whole numbers in order (1, 2, 3, 4, and so on) as the second factor.

DISCUSS Discuss with students how to determine if one number is a multiple of another. Ask: *How can you use a multiplication table to help you determine whether 30 is a multiple of 5?*

Yes; 30 is a multiple of 5 since $5 \times 6 = 30$.

EXAMPLE B This example shows a given number (42) that is not a multiple of another given number (8). Ask: *How can you use division to determine if 42 is a multiple of 8?*

EXAMPLE C This example shows a given number (45) that is a multiple of another given number (9). Ask: *How do you know that 45 is a multiple of 9?*

TRY Discuss with students the process they can use to determine if 33 is a multiple of 4.

No. The multiples of 4 are: 4, 8, 12, 16, 20, 24, 28, 32, 36, and so on. 33 is not a multiple of 4.

EXAMPLE D This example introduces the terms *array*, *prime number*, and *composite number*. Point out that an array is different from an area model in that an array is made of a set of objects (for example, flowers, stamps, or squares) arranged in rows and columns.

EXAMPLE E This example presents a number that is a prime number. The number 11 has only two factors, 1 and 11.

MODEL Explain that the number of models that students can draw for the factor pairs of a given number determines whether the number is prime or composite. If just one model can be drawn, then the number must be a prime number.

Students draw a 1 by 7 array. 7 is a prime number.

The Sieve of Eratosthenes

Have students complete the chart. Stress that students should cross off the multiples in order and work through to the end of the hundreds chart for each multiple. You may wish to provide calculators for this activity.

For answers, see page 81.

Practice

As students are working, pay special attention to problems 14 and 15, which provide an opportunity for students to apply their understanding of factors to a real-world situation.

For answers, see page 81.

Common Errors

When writing the factors for a number, students may forget to include 1. Remind them that the first two factors they should list for any number are the number itself and 1, and that all of the other factors will be between these two numbers.

Students may identify a composite number as a prime number. When students make this error, attempt to correct the misconception by demonstrating how to check a number in a systematic way. Ask: *Is there an expression that has 2 as a factor and this number as a product? Is there an expression that has 3 as a factor and this number as a product?* and so on.

Any part of this book is prohibited by law.

Common Errors section anticipates likely student errors and suggests ways to help

Problem Solving: Interpreting Fractions as Division



Learning Objective

- Students will interpret fractions as the division of a numerator by the denominator in order to solve word problems.

Before the Lesson

Introduce the concept that fractions can be interpreted as division by using a real-world example from your life or your students' lives. For example, you could tell students that you drive $\frac{10}{2}$ miles to work each day. Ask: *How many miles do I drive to work each day?* They should recognize that $\frac{10}{2} = 5$, so you drive 5 miles to work each day. Explain that $\frac{10}{2}$ is the same as $10 \div 2$ and the same as 5. In other words, can be interpreted as representing division.

Camping Trip

To help students understand that a fraction represents a quotient, have them solve a simpler problem. For example, ask: *Suppose that Gail emptied all the water from the container at the water cooler and that the container held 16 gallons of water. How many gallons would be in each jug?* In this case, students should see that 16 gallons of water split equally among 8 jugs is equal to $16 \div 8 = \frac{16}{8} = 2$ gallons. So, there would be 2 gallons of water in each jug. Since 5 gallons is split equally among 8 jugs, this is equal to $5 \div 8 = \frac{5}{8}$ gallon. So, each jug contains $\frac{5}{8}$ gallon.

SOLVE So, there are $5\frac{1}{8}$ sections for each jug.

CHECK The quotient, w , is $\frac{5}{8}$.

Each jug holds $\frac{5}{8}$ gallon of water.

Cooking in the Woods

The division in this problem results in a remainder. Help students see that since they are dealing with fractions, the quotient can be written as a mixed number.

SOLVE

$$\begin{array}{r} 1 \text{ R}6 \\ 18 \overline{)24} \\ \underline{-18} \\ 6 \end{array}$$

CHECK $18 \times 1 = 18$
 $18 + 6 = 24$
 The quotient, p , is $1\frac{6}{18}$.
 There are $1\frac{6}{18}$ pounds of meat for each person.

Ounces of Rice

The CHECK step for this problem shows how students can estimate what two whole-number values the answer lies between.

SOLVE

$$\begin{array}{r} 2 \text{ R}9 \\ 18 \overline{)45} \\ \underline{-36} \\ 9 \end{array}$$

So, $45 \div 18 = 2\frac{9}{18}$.

CHECK The quotient, r , is $2\frac{9}{18}$.
 There are $2\frac{9}{18}$ ounces of rice for each person.

Setting Up the Tents

SOLVE

$$\begin{array}{r} 2 \text{ R}4 \\ 6 \overline{)16} \\ \underline{-12} \\ 4 \end{array}$$

Write the remainder as a fraction.

$$\frac{4}{6}$$

So, $16 \div 6 = 2\frac{4}{6}$.

CHECK The quotient, l , is $2\frac{4}{6}$.
 Each piece of rope will be $2\frac{4}{6}$ feet long.

Practice

These problems provide an opportunity for students to solve real-world problems that involve interpreting the remainder as a fraction.

For answers, see page 77.